



Solve each problem using a tape diagram.

Answers

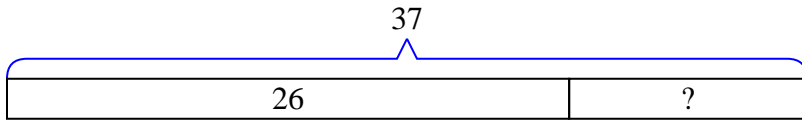
- 1) Frank owned 37 video games for his Playstation and Xbox. 26 of the games were for Xbox. How many games does Frank have for playstation?
- 2) Tiffany had 58 pieces of candy. 11 pieces are chocolate and the rest are sugary. How many pieces of candy does Tiffany have that are sugary?
- 3) A store had 51 sodas on Monday. If they sold 41 of them on Tuesday, how many would they have left on Wednesday?
- 4) John and Bianca have 44 books. Bianca has 26. How many books does John have?
- 5) Amy had 76 pieces of paper in her folder. She used 29 pieces. How many pieces does she have now?
- 6) A museum had 38 paintings. If they got rid of 27 of them, how many pictures would they have left?
- 7) Isabel's hair was 49 centimeters long. If she cut off 11 centimeters, how long is her hair now?

- 1. _____
- 2. _____
- 3. _____
- 4. _____
- 5. _____
- 6. _____
- 7. _____

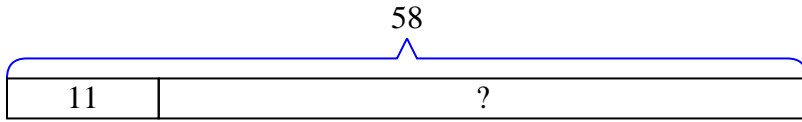


Solve each problem using a tape diagram.

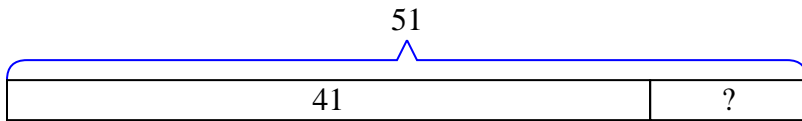
- 1) Frank owned 37 video games for his Playstation and Xbox. 26 of the games were for Xbox. How many games does Frank have for playstation?



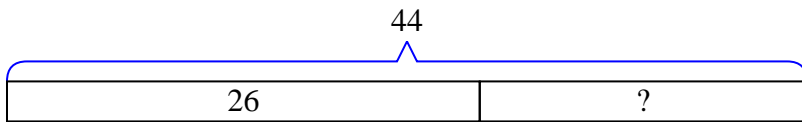
- 2) Tiffany had 58 pieces of candy. 11 pieces are chocolate and the rest are sugary. How many pieces of candy does Tiffany have that are sugary?



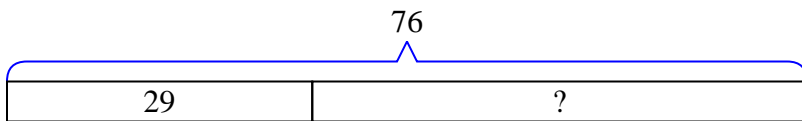
- 3) A store had 51 sodas on Monday. If they sold 41 of them on Tuesday, how many would they have left on Wednesday?



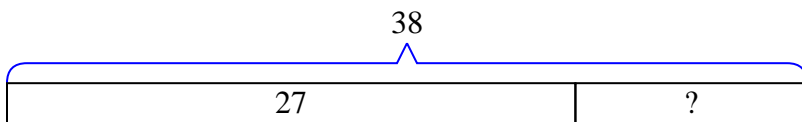
- 4) John and Bianca have 44 books. Bianca has 26. How many books does John have?



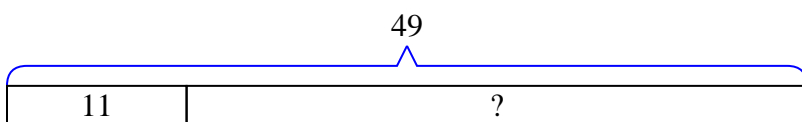
- 5) Amy had 76 pieces of paper in her folder. She used 29 pieces. How many pieces does she have now?



- 6) A museum had 38 paintings. If they got rid of 27 of them, how many pictures would they have left?



- 7) Isabel's hair was 49 centimeters long. If she cut off 11 centimeters, how long is her hair now?



Answers

1. 11

2. 47

3. 10

4. 18

5. 47

6. 11

7. 38